







# Mata Rang 5: Dul Siar

15ú – 19ú Meitheamh

## Súil siar tapa 8



1. Scriobh toradh na bhfachtóirí 7 agus 8.  
\_\_\_\_\_
2. Scriobh an **fachtóir** de 30 atá in easnamh.  
**1, 2, 3, \_\_\_\_\_ 6, 10, 15, 30.**
3. Scriobh an séú hialtraí de 9.  
\_\_\_\_\_
4. Cuir ciorcal ar an bhfocal ceart.  
Is uimhir **phríomha/ilchodach** í 39.
5. Scriobh an naoú huimhir chearnógach.  
\_\_\_\_\_
6. Tá trastomhas 72cm ag ciorcal.  
Cén fad é an ga? \_\_\_\_\_ cm
7. Léiríonn an pháirt seo an t-ábhar is fearr le 45 páiste.  
Cé mhéad páiste ar fearr leo Corpoideachas?  
\_\_\_\_\_
8. Cé mhéad céim atá in  $\frac{1}{6}$  de chasadh iomlán?  
\_\_\_\_\_ °
9.  Bhi 240 páiste i scoil.  
Cailíní ba ea 60% díobh.  
Cé mhéad cailín a bhí sa scoil?  
\_\_\_\_\_
10. Cuir an uimhir cheart sa bhosca chun cothromáid a dhéanamh den uimhir-abairt seo.  
 $45 + \square = 12 - 3$

11. Criochnaigh an cothroméid.  
Cuir an digit cheart sa bhosca.  
 $10\% \text{ de } 200 = \square + 9$
12.  €55 an bunphraghas a bhí ar phéire bróga reatha.  
Bhí laghdú 20% orthu sa reic. Cén praghas a bhí orthu sa reic?  
€ \_\_\_\_\_
13. Cad é costas 12.5 kg prátaí má chosnaíonn 2.5kg €1.40?  
€ \_\_\_\_\_ 
14. Méadaigh €85 faoi 100%.  
€ \_\_\_\_\_
15.  $0.038 \times 1,000 =$  \_\_\_\_\_
16. Scriobh na huimhreacha príomha idir 80 agus 90.  
\_\_\_\_\_ , \_\_\_\_\_
17. Choith Peaidi  $\frac{3}{4}$  dá chuid airgid agus chaith Cara  $\frac{11}{16}$  dá chuid airgid. Cén duine díobh a chaith an méid is mó airgid?  
\_\_\_\_\_
18. Is  $\frac{3}{8}$  d'uimhir é 40.  
Cén uimhir atá ann? \_\_\_\_\_
19. Is é €120 an gnáthphraghas ar hata. Bhí laghdú 30% air sa reic. Cé mhéad airgid a shábháil Órla má cheannaigh sí an hata sa reic?  
€ \_\_\_\_\_ 
20. Is achar dronuilleige é 84cm<sup>2</sup>. Más é 12cm an fad, cad í an inléine?  
\_\_\_\_\_ cm 

1. Write the product of 7 and 8. (i.e. multiply one by the other)
2. Write the missing factor of 30.
3. Write the 6<sup>th</sup> multiple of 9.
4. Circle the correct description: 39 is a prime/composite number.
5. Write the 9<sup>th</sup> square number.
9. There are 240 pupils in a school. 60% of them are girls. How many girls are there?
10. Write the correct number in the frame to make an equation of the number sentence.
11. Complete the equation. Put the correct number in the frame.
12. A pair of runners went on sale. Originally they cost €55. The discount was 20%. What is the sale price?
13. What will 12.5 kg of potatoes cost if 2.5 kg cost €1.40?
15. Multiply.
16. Write the prime numbers between 80 and 90.
17. Peadí spent  $\frac{3}{4}$  and Cora spent  $\frac{11}{14}$  of hers. Who spent the most money?
18.  $\frac{3}{8}$  of a number is 40. Find the whole number.
19. This hat usually costs €120. There is 30% off in the sale. How much will Orla save if she buys the hat at the sale price?
20. The area of a rectangle is 84cm<sup>2</sup>. If the length is 12cm, what is the width (nod: achar = F x L)

## Súil siar tapa 9

1.   
an t-ainm atá ar an  
gruth seo.



2. Cé mhéad imeall atá ar chiúb?

3.  Cé mhéad rinn  
atá ar chiúb?

4. Cé mhéad oghaidh atá ar ochtairnéadrán?

5. Cuir isteach an focal atá in easnamh thíos.  
Is féidir líne uimhreacha a  agus a  
iolrú in ord ar bith.

6. Tá ord tábhachtach nuair a bhíonn ag dealú  
nó ag .

7. Ag cuimhneamh ar an  
abairt 'Léim isteach  
raimh Sheán Daltún'  
criochnaigh an  
uimhir-abairt seo:  
 $6 \times 4 + 5 =$

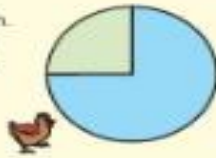


8. Criochnaigh an uimhir-abairt seo anois.  
 $36 - 21 + 7 =$

9. Réitigh:  
 $40 \div 5 + 1 \cdot 4 \times 6 =$


10.  Tá 35 páiste i rang.  
Bhí 20% díobh as  
láthair ar son lá  
amháin. Cé mhéad  
páiste a bhí i láthair?

11. Léiríonn 25% den  
phícheart seo 30 sicín.  
Cé mhéad sicín san  
iomlán a léiríonn an  
phícheart iomlán?



12.  $(4 \cdot 8 + 4) + 2 \cdot 1 \times 5 =$

13. Scriobh an chéad téarma eile sa seicheamh seo:  
1-7, 3-2, 4-7, 6-2,

14.  Tá 330 millilítear i mbuidéal uisce.  
Cé mhéad millilítear níos lú ná 1l  
atá i dtri bhuidéal cosúil leis?  
 ml

15. Tá 15 lítear uisce i mbucéad.  
Cé mhéad uisce a bhí fágtha sa  
bhucéad nuair a tógadh 3.5l  
agus 3.05l as?  l



16. Tá 5 mhirlín dhearga,  
6 mhirlín bhui agus 4  
mhirlín ghorm sa mhóla.  
Cén seans atá ann go  
roghnóidh tú mirlín bui  
agus piúcin ort?



17. Tá 8 dteabh ar spinéar, tá 5 cinn ghorma,  
1 teabh glas agus 2 thaobh dhearga.  
Cén dóth is dóicil ar a stoplaídh an spinéar?

18. Méadaigh 200ml foai 100%.

19. Scriobh síos an chéad téarma eile sa  
seicheamh seo:  
12-8, 10-4, 8, 5-6,

20.  $\frac{3}{8} \times 6 =$

SÚIL  
SIAR

- Name this 3D shape.5
- How many edges on a cube?
- How many corners does a cube have?
- How many faces on an octahedron?
- Fill in the missing word: We can multiply and \_\_\_\_\_ numbers in any order.
- The order in which we subtract or \_\_\_\_\_ numbers is important.
- Oibrigh amach an freagra ar:  $6 \times 4 + 5$ . Remember BOMDAS.
- Solve.
- Solve.
- There are 35 children in a class. 20% of them were absent one day. How many children were present?
- This pie-chart shows that 25 % of the chicks is 30. How many chicks are there altogether?
- Solve.
- Write the next number in the pattern.
- A bottle contains 330 ml of water. How many millilitres less than 1l would 3 bottles contain?
- There are 15 litres of water in a bucket. How much water will be in the bucket when 3.5l and 3.05l have been removed?
- There are 5 red marbles, 6 yellow marbles and 4 blue marbles in a bag. What are the chances of choosing a yellow marble?
- There are 8 colour segments on a spinner. 5 blue, 1 green and 2 red. On which colour is the spinner most likely to stop?
- Write down the next number in the pattern.
- $\frac{3}{8} \times 6$ .

## Súil Siar Tapa 10



1. Déan 47 céad uair níos mó.

\_\_\_\_\_

2. 33 sin meán trí huimhir. Is iad 46 agus 37 an chéad dá uimhir, cad é an tríú huimhir?

\_\_\_\_\_

3. Tá \_\_\_\_\_ líne shiméadrachta ar heicseagán dronuilleogach.



4. Cuir ciorcal ar an gcodán a bhfuil an luach céanna eige le

$$\frac{3}{4} \quad \frac{3}{8} \quad \frac{5}{6} \quad \frac{9}{12} \quad \frac{7}{10} \quad \frac{8}{12}$$

5.  $\frac{2}{3} + \frac{2}{6} =$

6. Scriobh isteach an uimhir atá in easnamh.

$$\frac{55}{54} + \frac{\square}{4} = 6$$

7. Má roinnim 96kg ar 12, is é an freagra a fhaighim ná \_\_\_\_\_ kg.

8.  $5837 \times 1,000 =$  \_\_\_\_\_

9. Cosnaíonn gránach €2.40 le haghaidh 750 gram. Cén costas a bheadh ar 6kg den ghránach sin?



€ \_\_\_\_\_



10. D'íoc Áine €200 le haghaidh gúna. Fuair Tríona a gúna ar 25% níos lá. Cé mhéad a chosain an dá ghúna? € \_\_\_\_\_

11. Suimigh 4,006 agus 52,970. \_\_\_\_\_

12.  $63 + 1,000 =$  \_\_\_\_\_

13. Cén t-ainm atá ar an uillinn seo?

\_\_\_\_\_



14. Cosnaíonn píorai €3.60 le haghaidh mála de sé chinn. Cosnaíonn mála ina bhfuil naoi gcein €4.50. Cé mhéad an píorai a shábhálfaí dá gceannóir na píorai ar an luach is fearr? € \_\_\_\_\_

15.



Bhí 60 pluma i mbosca. Thóg Niall 40% díobh agus thóg Anraí 45% díobh. Cé mhéad pluma a bhí fágtha? \_\_\_\_\_

16. Méadaigh €84 faoi 50%.

€ \_\_\_\_\_

17. Thosaigh scannán ar 11:35. Mhair sé 114 nóiméad. Cén t-am a chríochnaigh sé?

\_\_\_\_\_

18. D'fhóg traein Baile Átha Cliath le dul go Gaillimh ar 14:35. Mhair an turas 145 nóiméad. Cén t-am a shraich sí Gaillimh?

\_\_\_\_\_



19. Cé mhéad níos mó atá an 7 san uimhir 670 ná an 7 san uimhir 6-073?

\_\_\_\_\_

20. Ba é €44.50 an bile an mbialann. Bhí táille sheirbhíse 10% ar an méid sin. Cén costas iamlán a bhí air?

€ \_\_\_\_\_



1. Make 47 one hundred times bigger.
2. 33 is the average of three numbers. If 46 and 37 are the first 2 numbers, what is the third?
3. A hexagon has \_\_\_\_\_ lines of symmetry.
4. Circle the fraction that has the same value as  $\frac{3}{4}$ .
5. Add the fractions.
6. Fill in the missing number.
7. Divide 96kg by 12
8. Multiply.
9. If 750 g of cereal costs €2.40, what will 6 kg cost?
10. Áine paid €200 for a dress. Tríona got her dress for 25% less than that. How much did the two dresses cost?
11. Add.
12. Multiply.
13. What is this type of angle called?
14. One bag of pears costs €3.60 for 6 pears. A different bag costs €4.50 for 9. How much per pear would you save by buying the best value for money bag?
15. There were 60 plums in a box. Niall took 40% and Henry took 45%. How many plums were left?
16. Increase €84 by 50%
17. A film started at 11.35. It lasted for 114 minutes. What time did the film finish?
18. A train left Dublin at 14.35 to go to Galway. The journey took 145 minutes. What time did the train arrive in Galway?

# Comhghairdeas

## Rang 5!

Tá an clár  
matamaitice  
críochnaithe agaibh  
anois.

Obair iontach déanta -  
maith sibh!

Slán go fóill ó mhúinteoirí Fiona & Gearóid.  
Feicfidh muid i Rang 6 sibh!